

Ridgeway High School Summer Assignment 2016

Solve each equation. You Must Show Your Work To Receive Credit!

1) $1 - 7x = -6 - 8x$

2) $x + 1 = -5 + x + 3x$

3) $6x + 3 = -9 - 6x$

4) $-3 - 8x = 7 - 6x$

5) $5a + 2a = 4 + 8a$

6) $-35 - p = -6 - 3(p + 7)$

7) $3(1 - 8x) = 8x + 35$

8) $-7 - 7r = 7(5 - 2r)$

$$9) 7(4m + 8) = -32 + 6m$$

$$10) 2(1 + 6p) = 13 + p$$

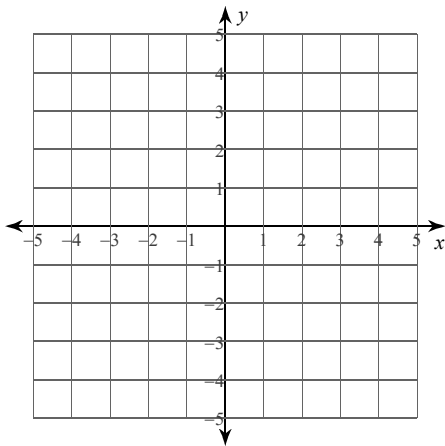
Solve each system by substitution. You Must Show Your Work To Receive Credit!

$$11) \begin{aligned} y &= -6 \\ -4x - y &= -2 \end{aligned}$$

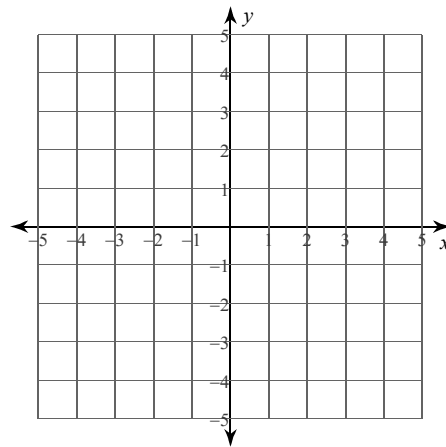
$$12) \begin{aligned} -2x - y &= 11 \\ 3x - 4y &= -22 \end{aligned}$$

Solve each system by graphing.

$$13) \begin{aligned} y &= -\frac{3}{2}x - 4 \\ y &= \frac{3}{2}x + 2 \end{aligned}$$



$$14) \begin{aligned} 6x + y &= 3 \\ y &= -3 \end{aligned}$$



Solve each system by elimination. You Must Show Your Work To Receive Credit!

$$15) \begin{cases} 10x - 16y = -20 \\ x - 8y = 30 \end{cases}$$

$$16) \begin{cases} -6x - 3y = 15 \\ 9x + 10y = 27 \end{cases}$$

Factor each completely. You Must Show Your Work To Receive Credit!

$$17) b^2 - 15b + 56$$

$$18) v^2 + 13v + 30$$

$$19) 8a^2 - 61a + 35$$

$$20) 9b^2 + 24b + 16$$

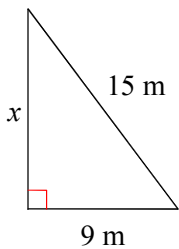
Solve each equation by factoring. You Must Show Your Work To Receive Credit!

$$21) x^2 + 7x - 8 = 0$$

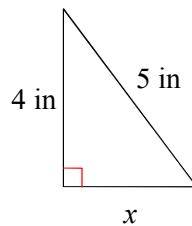
$$22) n^2 - 2n - 15 = 0$$

Find the missing side of each triangle. Round your answers to the nearest tenth if necessary.

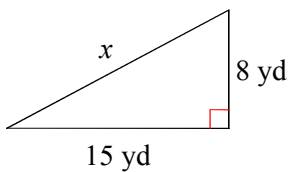
23)



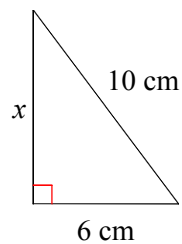
24)



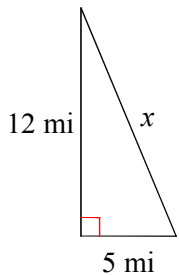
25)



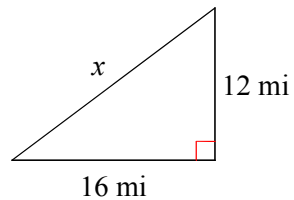
26)



27)



28)



Find the distance between each pair of points. You Must Show Your Work To Receive Credit!

29) $(2, 0), (-8, 0)$

30) $(2, 2), (-3, 5)$

31) $(-8, 5), (-8, -8)$

32) $(-6, 8), (8, 8)$

Find the midpoint of the line segment with the given endpoints.

33) $(-4, 8), (2, -8)$

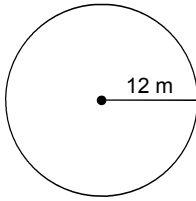
34) $(-8, -6), (4, 4)$

35) $(9, 9), (1, -3)$

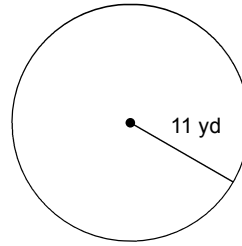
36) $(9, -2), (-2, 8)$

Find the area of each. Use your calculator's value of π . Round your answer to the nearest tenth.

37)

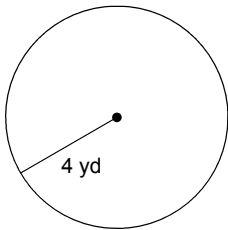


38)

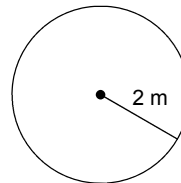


Find the circumference of each circle. Use your calculator's value of π . Round your answer to the nearest tenth.

39)

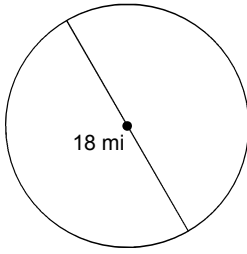


40)

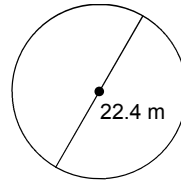


Find the area of each. Use your calculator's value of π . Round your answer to the nearest tenth.

41)

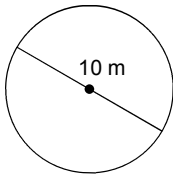


42)

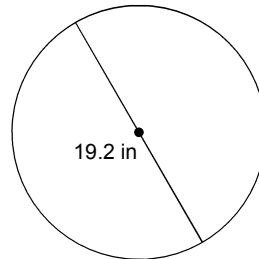


Find the circumference of each circle. Use your calculator's value of π . Round your answer to the nearest tenth.

43)

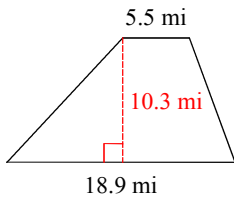


44)

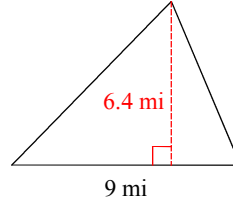


Find the area of each (Triangle, Rectangle, Square, Trapezoid). You Must Show Your Work To Receive Credit!

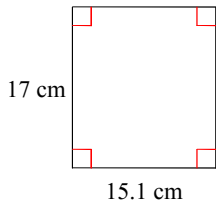
45)



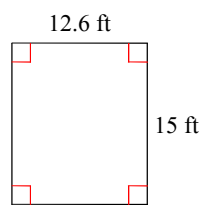
46)



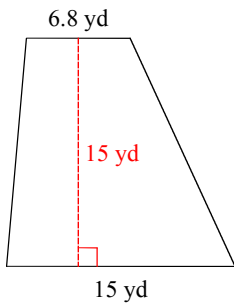
47)



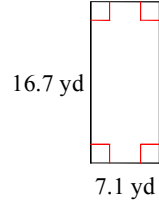
48)



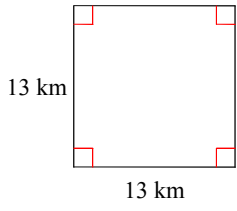
49)



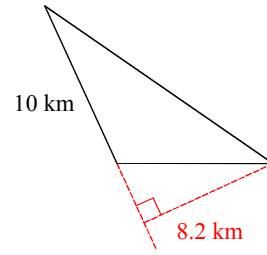
50)



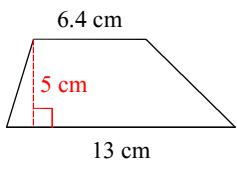
51)



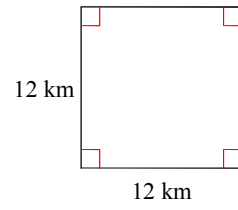
52)



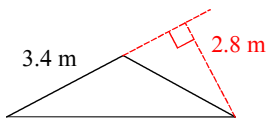
53)



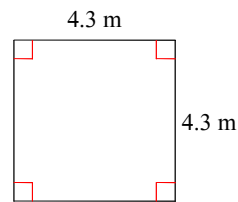
54)



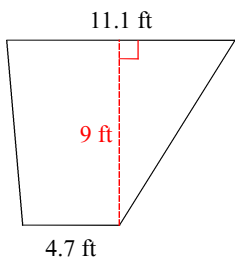
55)



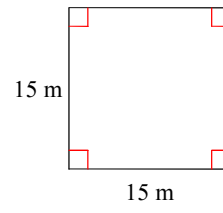
56)



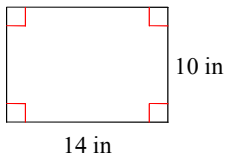
57)



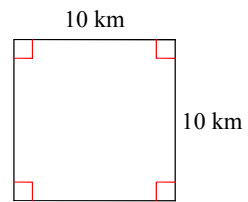
58)




59)




60)





Geometry Warm-ups: Ordered Pairs



Ordered Pairs 1

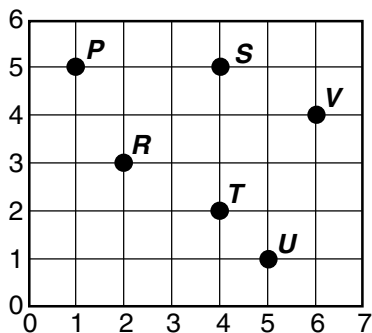
Write the letter for each ordered pair.

A. (2, 3) _____

B. (4, 5) _____

C. (6, 4) _____

D. (1, 5) _____



Ordered Pairs 2

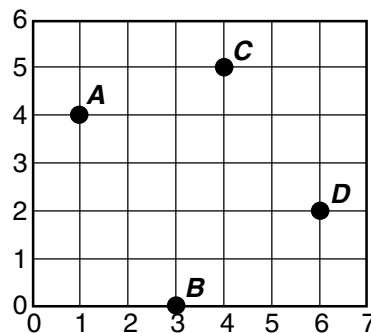
Write the ordered pair for each point.

A _____

B _____

C _____

D _____

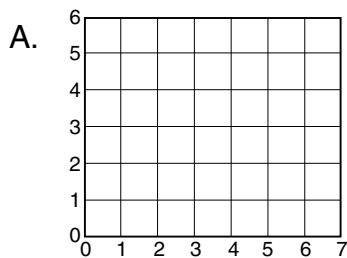


Ordered Pairs 3

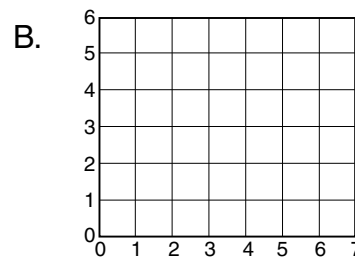
Plot each point. Connect the points in order. Write the name of the polygon that is formed.

A. Polygon _____

B. Polygon _____



(1, 1), (3, 5), (6, 1)



(1, 2), (1, 5), (6, 5), (6, 2)

Ordered Pairs 4

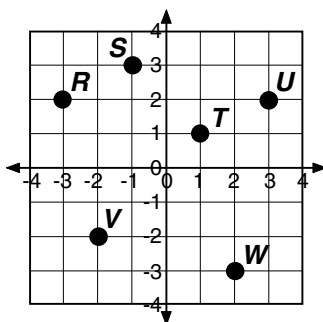
Write the letter for each ordered pair.

A. (2, -3) _____

B. (-1, 3) _____

C. (-2, -2) _____

D. (3, 2) _____



Ordered Pairs 5

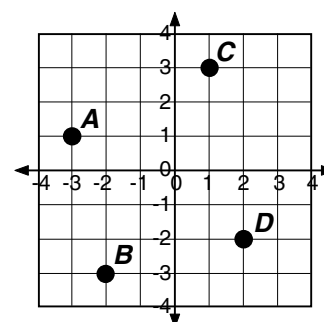
Write the ordered pair for each point.

A _____

B _____

C _____

D _____

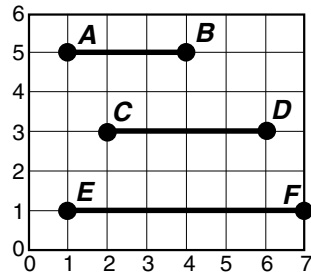


Geometry Warm-ups: Lengths on the Coordinate Plane

Lengths on the Coordinate Plane 1

To find the length of a horizontal line segment, find the difference of the x-coordinates.

\overline{AB} is _____ units long.
 $A(1, 5)$ $B(4, 5)$
 $4 - 1 = 3$

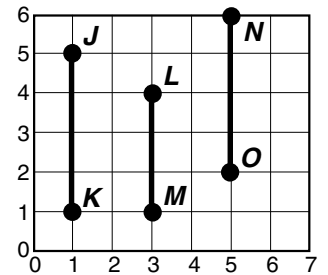


\overline{CD} is _____ units long.
 \overline{EF} is _____ units long.

Lengths on the Coordinate Plane 2

To find the length of a vertical line segment, find the difference of the y-coordinates.

\overline{JK} is _____ units long.
 $J(1, 5)$ $K(1, 1)$
 $5 - 1 = 4$



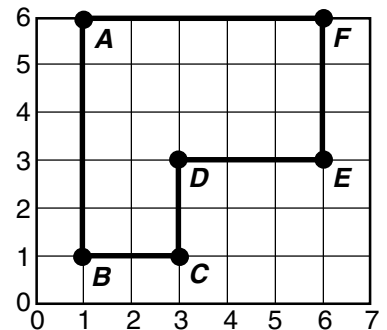
\overline{LM} is _____ units long.
 \overline{NO} is _____ units long.

Lengths on the Coordinate Plane 3

Write the coordinates (ordered pairs) for each point. Then find the lengths of the segments.

A _____ B _____ C _____
 D _____ E _____ F _____

\overline{AB} _____ units \overline{CD} _____ units \overline{DE} _____ units
 \overline{AF} _____ units \overline{EF} _____ units \overline{BC} _____ units



Lengths on the Coordinate Plane 4

- How long is the horizontal line segment between points $(0, 5)$ and $(4, 5)$? _____ units
- How long is the vertical line segment between points $(4, 8)$ and $(4, 2)$? _____ units
- How long is the horizontal line segment between points $(3, 6)$ and $(10, 6)$? _____ units

Lengths on the Coordinate Plane 5

A rectangle is 7 units long and 3 units wide. Two of the corners are at $(10, 2)$ and $(3, 2)$. What is the location of the other two corners?

On another sheet of paper, draw a grid and plot the points to help you.